

Practice Assessment (1) Unit 3 - Mathematics 3 (H)

Outcome 1

Marks

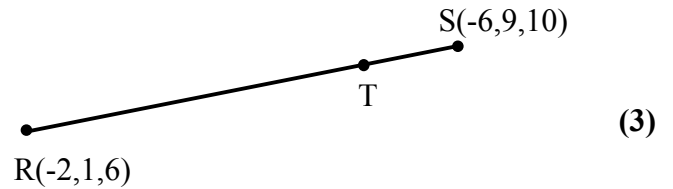
1. (a) P, Q and R have coordinates $(2, -3, 3)$, $(6, -2, 0)$ and $(14, 0, -6)$ respectively.

(i) Write down the components of \vec{PQ} . (1)

(ii) Hence show that the points P, Q and R are collinear. (3)

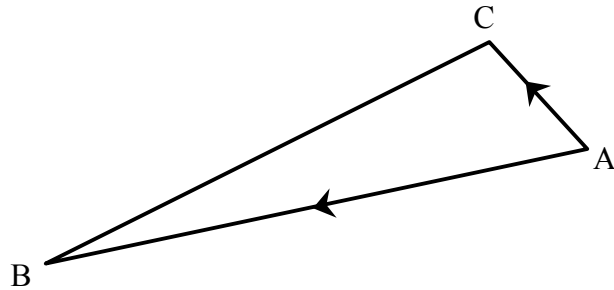
- (b) The point T divides RS in the ratio 3:1 as shown in the diagram.

Find the coordinates of T.



2. The diagram shows triangle ABC where

$$\vec{AB} = \begin{pmatrix} 5 \\ 0 \\ 12 \end{pmatrix} \quad \text{and} \quad \vec{AC} = \begin{pmatrix} 2 \\ -2 \\ 1 \end{pmatrix}$$



(a) Find the value of $\vec{AB} \cdot \vec{AC}$. (1)

(b) Use the result of (a) to find the size of angle BAC. (4)

Outcome 2

3. (a) Differentiate $-6 \cos x$ with respect to x . (1)

(b) Given $y = \frac{1}{3} \sin x$, find $\frac{dy}{dx}$. (1)

4. Find $g'(x)$ when $g(x) = (x - 1)^{-4}$. (2)

5. (a) Find $\int 2 \sin x \, dx$ (2)

(b) Integrate $\frac{1}{2} \cos x$ with respect to x . (1)

(c) Evaluate $\int_1^2 (x + 3)^4 \, dx$ (4)

Outcome 3

6. (a) Simplify $\log_x 8 + \log_x 5$. (1)
- (b) Simplify $5\log_9 3 - \log_9 27$ (4)
7. (a) If $x = \frac{\log_e 33}{\log_e 7}$, find an approximation for x . (1)
- (b) Given that $\log_{10} y = 2 \cdot 5$, write down an expression for the **exact** value of y . (1)
- (c) If $y = 10^{1.66}$, find an approximation for y . (1)

Outcome 4

8. Express $4\cos x^\circ + \sin x^\circ$ in the form $k \cos(x - a)^\circ$ where $k > 0$ and $0 \leq a < 360$. (5)

Practice Assessment (2) Unit 3 - Mathematics 3 (H)

Outcome 1

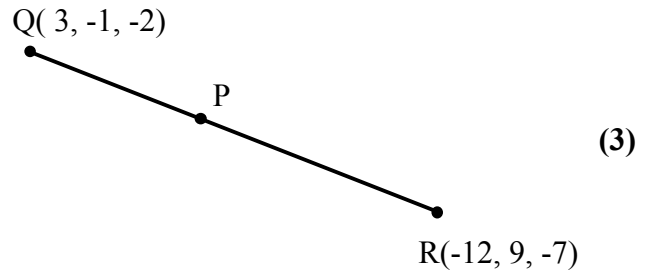
Marks

1. (a) E, F and G have coordinates (1, 4, -2) , (-1, 8, -1) and (-5, 16, 1) respectively.

(i) Write down the components of \vec{EF} . (1)

(ii) Hence show that the points E, F and G are collinear. (3)

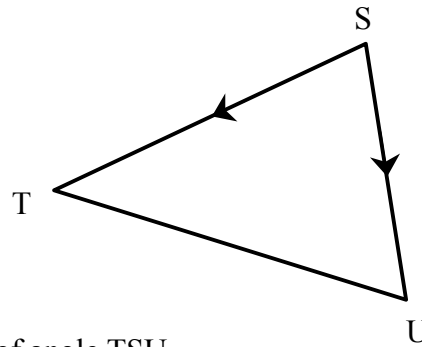
(b) The point P divides QR in the ratio 2:3 as shown in the diagram.



Find the coordinates of P.

2. The diagram shows triangle STU where

$$\vec{ST} = \begin{pmatrix} 2 \\ 3 \\ -1 \end{pmatrix} \quad \text{and} \quad \vec{SU} = \begin{pmatrix} -2 \\ 2 \\ 0 \end{pmatrix}$$



(a) Find the value of $\vec{ST} \cdot \vec{SU}$. (1)

(b) Use the result of (a) to find the size of angle TSU. (4)

Outcome 2

3. (a) Differentiate $2 \cos x$ with respect to x . (1)

(b) Given $y = 5 \sin^3 x$, find $\frac{dy}{dx}$. (1)

4. Find $h'(x)$ when $h(x) = (2 + 3x)^3$. (2)

5. (a) Find $\int \frac{1}{2} \cos x \, dx$ (2)

(b) Integrate $\sin 4x$ with respect to x . (1)

(c) Evaluate $\int_2^4 (x - 2)^3 \, dx$ (4)

Outcome 3

6. (a) Simplify $\log_p 6 + \log_p 3$. (1)
- (b) Simplify $2 \log_2 6 - \log_2 9$ (4)
7. (a) If $x \log_e 9 = \log_e 11$, find an approximation for x . (1)
- (b) Given that $\log_3 y = 1.6$, write down an expression for the **exact** value of y . (1)
- (c) If $y = 10^{0.8}$, find an approximation for y . (1)

Outcome 4

8. Express $5 \sin x^\circ + 2 \cos x^\circ$ in the form $k \cos(x - a)^\circ$ where $k > 0$ and $0 \leq a < 360$. (5)

Practice Assessment (3) Unit 3 - Mathematics 3 (H)

Outcome 1

Marks

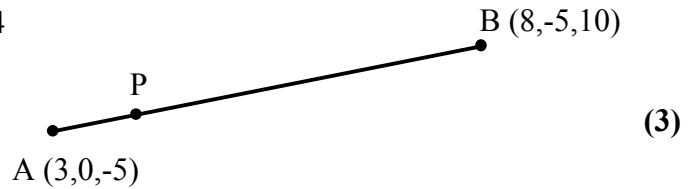
1. (a) S, T and U have coordinates $(1, 2, -5)$, $(-3, 4, 1)$ and $(-5, 5, 4)$ respectively.

(i) Write down the components of \vec{ST} . (1)

(ii) Hence show that the points S, T and U are collinear. (3)

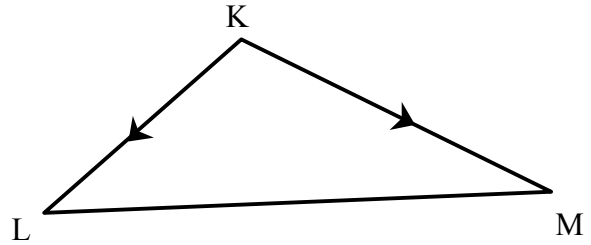
- (b) The point P divides AB in the ratio 1 : 4 as shown in the diagram.

Find the coordinates of P.



2. The diagram shows triangle KLM where

$$\vec{KL} = \begin{pmatrix} 2 \\ 1 \\ 3 \end{pmatrix} \quad \text{and} \quad \vec{KM} = \begin{pmatrix} -4 \\ -3 \\ 2 \end{pmatrix}$$



(a) Find the value of $\vec{KL} \cdot \vec{KM}$. (1)

(b) Use the result of (a) to find the size of angle LKM. (4)

Outcome 2

3. (a) Differentiate $-\frac{1}{2} \sin x$ with respect to x . (1)

(b) Given $y = \cos 2x$, find $\frac{dy}{dx}$. (1)

4. Find $f'(x)$ when $f(x) = (3x + 1)^{-6}$. (2)

5. (a) Find $\int -3 \sin x \, dx$ (2)

(b) Integrate $\cos 4x$ with respect to x . (1)

(c) Evaluate $\int_1^3 (2x + 1)^3 \, dx$ (4)

Outcome 3

6. (a) Simplify $\log_y 16 - \log_y 8$. (1)
- (b) Simplify $3 \log_4 2 + \log_4 8$ (4)
7. (a) If $p \log_e 12 = 2 \log_e 17$, find an approximation for p . (1)
- (b) Given that $\log_2 x = 3 \cdot 4$, write down an expression for the **exact** value of x . (1)
- (c) If $y = 4^{2 \cdot 7}$, find an approximation for y . (1)

Outcome 4

8. Express $7 \sin x^\circ + 4 \cos x^\circ$ in the form $k \cos(x - a)^\circ$ where $k > 0$ and $0 \leq a < 360$. (5)

Practice Assessment 1

- Outcome 1 :** 1. (a) i) $\vec{PQ} = \begin{pmatrix} 4 \\ 1 \\ -3 \end{pmatrix}$ ii) proof (b) T(-5, 7, 9)
2. (a) $\vec{AB} \cdot \vec{AC} = 22$ (b) $55 \cdot 7^\circ$
- Outcome 2 :** 3. (a) $6 \sin x$ (b) $\frac{dy}{dx} = \frac{1}{3} \cos x$ 4. $g'(x) = -4(x-1)^{-5}$
5. (a) $-2 \cos x + C$ (b) $\frac{1}{2} \sin x + C$ (c) $420 \cdot 2$
- Outcome 3 :** 6. (a) $\log_x 40$ (b) 1 7. (a) $1 \cdot 80$ (b) $y = 10^{2.5}$ (c) $45 \cdot 71$
- Outcome 4 :** 8. $\sqrt{17} \cos(x - 14 \cdot 0)^\circ$

Practice Assessment 2

- Outcome 1 :** 1. (a) i) $\vec{EF} = \begin{pmatrix} -2 \\ 4 \\ 1 \end{pmatrix}$ ii) proof (b) P(-3, 3, -4)
2. (a) $\vec{ST} \cdot \vec{SU} = 2$ (b) $79 \cdot 1^\circ$
- Outcome 2 :** 3. (a) $-2 \sin x$ (b) $\frac{dy}{dx} = 15 \sin^2 x \cdot \cos x$ 4. $h'(x) = 9(2 + 3x)^2$
5. (a) $\frac{1}{2} \sin x + C$ (b) $-\frac{1}{4} \cos 4x + C$ (c) 4
- Outcome 3 :** 6. (a) $\log_p 18$ (b) 2 7. (a) $1 \cdot 09$ (b) $y = 3^{1.6}$ (c) $6 \cdot 3$
- Outcome 4 :** 8. $\sqrt{29} \cos(x - 68 \cdot 2)^\circ$

Practice Assessment 3

- Outcome 1 :** 1. (a) i) $\vec{ST} = \begin{pmatrix} -4 \\ 2 \\ 6 \end{pmatrix}$ ii) proof (b) P(4, -1, -2)
2. (a) $\vec{KL} \cdot \vec{KM} = -5$ (b) $104 \cdot 4^\circ$
- Outcome 2 :** 3. (a) $-\frac{1}{2} \cos x$ (b) $\frac{dy}{dx} = -2 \sin 2x$ 4. $f'(x) = -18(3x+1)^{-7}$
5. (a) $3 \cos x + C$ (b) $\frac{1}{4} \sin 4x + C$ (c) 290
- Outcome 3 :** 6. (a) $\log_y 2$ (b) 3 7. (a) $2 \cdot 28$ (b) $x = 2^{3.4}$ (c) $42 \cdot 2$
- Outcome 4 :** 8. $\sqrt{65} \cos(x - 60 \cdot 3)^\circ$



Higher Mathematics

UNIT 3

Specimen NAB Assessment

HSN23510

This document was produced specially for the HSN.uk.net website, and we require that any copies or derivative works attribute the work to Higher Still Notes.

For more details about the copyright on these notes, please see
<http://creativecommons.org/licenses/by-nc-sa/2.5/scotland/>

UNIT 3

Specimen NAB Assessment

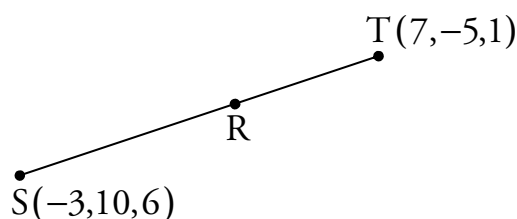
Outcome 1

1. (a) Points A, B and C have coordinates $(-4, -3, 1)$, $(0, -1, 0)$ and $(4, 1, -1)$ respectively.

(i) Write down the components of \overline{AC} .

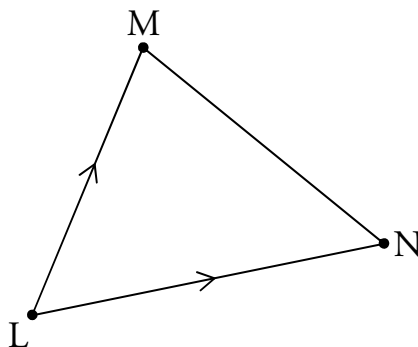
(ii) Hence show that the points A, B and C are collinear. 4

- (b) The point R divides \overline{ST} in the ratio 3:2, as shown below.



Find the coordinates of R. 3

2. The diagram shows triangle LMN where $\overline{LM} = \begin{pmatrix} 3 \\ 4 \\ 2 \end{pmatrix}$ and $\overline{LN} = \begin{pmatrix} -2 \\ 4 \\ 5 \end{pmatrix}$.



(a) Find the value of $\overline{LM} \cdot \overline{LN}$. 1

(b) Use your answer from part (a) to find the size of angle \widehat{MLN} . 4

Outcome 2

3. (a) Differentiate $-2\sin x$ with respect to x . **1**
- (b) Given $y = 5\cos x$, find $\frac{dy}{dx}$. **1**
4. Find $f'(x)$ when $f(x) = (2x + 7)^{\frac{1}{3}}$. **2**
5. (a) Find $\int \left(\frac{\sqrt{3}}{2}\cos x\right) dx$. **2**
- (b) Integrate $3\sin x$ with respect to x . **1**
- (c) Evaluate $\int_4^6 (x - 3)^3 dx$. **4**

Outcome 3

6. (a) Simplify $\log_a 7 + \log_a 3$. **1**
- (b) Simplify $\log_3 5 - 3\log_3 2$. **3**
- (c) Evaluate $\log_2 2$. **1**
7. (a) Given $x = \frac{\log_e 7}{\log_e 4}$, find an approximation for x . **1**
- (b) Given $\log_{10} y = 3.1$, write an expression for the exact value of y . **1**
- (c) Given $y = 10^{2.9}$, find an approximation for y . **1**

Outcome 4

8. Express $12\cos x + 5\sin x$ in the form $k\cos(x - a)$ where $k > 0$ and $0 \leq a \leq 360$. **5**

Marking Instructions

Pass Marks

Outcome 1

$$\boxed{\frac{9}{12}}$$

Outcome 2

$$\boxed{\frac{8}{11}}$$

Outcome 3

$$\boxed{\frac{5}{8}}$$

Outcome 4

$$\boxed{\frac{3}{5}}$$

Outcome 1 – Vectors	
1. (a) (i) $\overrightarrow{AC} = c - a = \begin{pmatrix} 8 \\ 4 \\ -2 \end{pmatrix} \checkmark = 2 \begin{pmatrix} 4 \\ 2 \\ -1 \end{pmatrix}$	<ul style="list-style-type: none"> • Components of \overrightarrow{AC} <p style="text-align: right;">1</p>
(ii) $\overrightarrow{AB} = b - a \checkmark = \begin{pmatrix} 0 \\ -1 \\ 0 \end{pmatrix} - \begin{pmatrix} -4 \\ -3 \\ 1 \end{pmatrix} = \begin{pmatrix} 4 \\ 2 \\ -1 \end{pmatrix} \checkmark$ Since $2\overrightarrow{AB} = \overrightarrow{AC}$ and A is a common point, A, B and C are collinear. \checkmark	<ul style="list-style-type: none"> • Know to find \overrightarrow{AB} or \overrightarrow{BC} • Components of \overrightarrow{AB} or \overrightarrow{BC} • Conclusion <p style="text-align: right;">3</p>
(b) $\frac{SR}{RT} = \frac{3}{2} \checkmark$ $2\overrightarrow{SR} = 3\overrightarrow{RT}$ $2(\mathbf{r} - \mathbf{s}) = 3(\mathbf{t} - \mathbf{r})$ $5\mathbf{r} = 3\mathbf{t} + 2\mathbf{s} \checkmark$ $\mathbf{r} = \begin{pmatrix} 3 \\ 1 \\ 3 \end{pmatrix}$ R is the point (3,1,3). \checkmark	<ul style="list-style-type: none"> • Strategy for finding R • Process • State the coordinates of R <p style="text-align: right;">3</p>
2. (a) $\overrightarrow{LM} \cdot \overrightarrow{LN} = (3 \times -2) + (4 \times 4) + (2 \times 5) = 20 \checkmark$	<ul style="list-style-type: none"> • Calculate scalar product <p style="text-align: right;">1</p>

(b) $\cos \widehat{MLN} = \frac{\overline{LM} \cdot \overline{LN}}{ \overline{LM} \overline{LN} } \checkmark$ $= \frac{20}{\sqrt{3^2 + 4^2 + 2^2} \sqrt{(-2)^2 + 4^2 + 5^2}} \checkmark$ $= 0.554 \checkmark$ $\widehat{MLN} = 56.4 \checkmark \text{ (to 1 d.p.)}$	<ul style="list-style-type: none"> • Use $a \cdot b = a b \cos \theta$ • Start to process • Complete process • State angle 	4
Outcome 2 – Further Calculus		
3. (a) $\frac{d}{dx}(-2 \sin x) = -2 \cos x \checkmark$	• Differentiate	1
(b) $\frac{dy}{dx} = -5 \sin x \checkmark$	• Differentiate	1
4. $f'(x) = \frac{1}{3}(2x+7)^{-\frac{2}{3}} \checkmark \times 2 \checkmark$ $= \frac{2}{3\sqrt[3]{(2x+7)^2}}$	<ul style="list-style-type: none"> • Differentiate term with fractional power • Use chain rule 	2
5. (a) $\int \left(\frac{\sqrt{3}}{2} \cos x\right) dx = \frac{\sqrt{3}}{2} \sin x \checkmark + c \checkmark$	<ul style="list-style-type: none"> • Integrate • Constant of integration 	2
(b) $\int (3 \sin x) dx = -3 \cos x \checkmark + c$	• Integrate	1
(c) $\int_4^6 (x-3)^3 dx = \left[\frac{(x-3)^4 \checkmark}{4 \checkmark} \right]_4^6$ $= \frac{1}{4}(6-3)^4 - \frac{1}{4}(4-3)^4 \checkmark$ $= \frac{80}{4}$ $= 20 \checkmark$	<ul style="list-style-type: none"> • Raise power • Correct multiplier • Substitute limits • Process 	4
Outcome 3 – Exponentials and Logarithms		
6. (a) $\log_a 7 + \log_a 3 = \log_a 21 \checkmark$	• $\log_a x + \log_a y = \log_a xy$	1
(b) $\log_3 5 - 3 \log_3 2 = \log_3 5 - \log_3 2^3 \checkmark$ $= \log_3 \frac{5}{2^3} \checkmark$ $= \log_3 \frac{5}{8} \checkmark$	<ul style="list-style-type: none"> • $k \log_a x = \log_a x^k$ • $\log_a x - \log_a y = \log_a \frac{x}{y}$ • Complete 	3
(c) $\log_2 2 = 1 \checkmark$	• Know that $\log_a a = 1$	1
7. (a) 1.404 \checkmark (to 3 d.p.)	• Process	1

(b) $y = 10^{3.1}$ ✓	• Use $\log_a y = x \Leftrightarrow y = a^x$ 1
(c) 794.3 ✓ (to 1 d.p.)	• Process 1
Outcome 4 – Wave Functions	
<p>8. $k \cos(x - a) = k \cos a \cos x + k \sin a \sin x$ ✓</p> $\left. \begin{array}{l} k \cos a = 12 \\ k \sin a = 5 \end{array} \right\} \checkmark \Rightarrow k = \sqrt{12^2 + 5^2} = 13 \checkmark$ $\tan a = \frac{5}{12} \checkmark$ $a = 22.6 \checkmark \text{ (to 1 d.p.)}$ <p>So $12 \cos x + 5 \sin x = 13 \cos(x - 22.6)$.</p>	<ul style="list-style-type: none"> • Use compound angle formula • Extract $k \cos a$ and $k \sin a$ • Calculate k • State $\tan a$ • Calculate a <p style="text-align: right;">5</p>